

## Year 2 Homework – Term 4: Pirates!

Please choose one task a week for Term 4! When you have finished you can upload a picture/video of your home learning onto our class stream or on the homework assignment. We are looking forward to seeing what you get up to! We will share our home learning in class 😊 **Remember to read 5 times a week and record this in your reading record book for extra play.**

<p><u>English</u></p> <p>Can you write a pirate poem? What key vocabulary will you include in your poem?</p> <p><b>Spelling:</b> Practice spelling our Term 3 spelling rules. See the sheet attached. You could do rainbow writing, bubble writing or hangman!</p> <p><b>Reading:</b> Complete the attached newspaper article and answer the retrieval questions.</p>	<p><u>Computing</u></p> <p>Research a famous fictional Pirate and a famous real-life Pirate. Create a fact file about each and make comparisons about each Pirate. Write down which Pirate you prefer and why.</p> <p><u>Speaking and listening</u></p> <p>Watch a film that is based about Pirates, such as Peter Pan. What do you notice about the characters? What do you think about the setting? What impression does the film give you about Pirates?</p> <p><b>Maths</b></p> <p>Spend some time on TT rockstars practicing your times tables or on Maths shed.</p>	<p><u>Art</u></p> <p>Sketch a picture of you dressed as a Pirate! Where are you going? What are you looking for? What does your ship look like?</p> <p><b>DT</b></p> <p>Design an outfit inspired by Pirates and label your design.</p> <p><b>Mindfulness</b></p> <p>Spend a quiet moment reflecting on your week. Watch 'Sitting like a frog' on YouTube or have a go at a Cosmic yoga video.</p>
<p><u>Wellbeing</u></p> <p>Make a treasure box and put things in it that you treasure and are special to you. Reflect on what you're grateful for.</p>	<p><b>Revising:</b></p> <p>Complete the attached learning to support your money knowledge. Complete White Rose attached Maths Money booklet.</p>	



Reading:

Issue #1543

20<sup>th</sup> August 1588

5 pence

# I HAVE THE HEART AND STOMACH OF A KING

After putting a stop to the Spanish Armada our Queen, Elizabeth, greeted the people with one of the greatest speeches of our times. At a time when we need to feel strong and safe, we have the best Queen we could ever ask for!



We invited our Queen to meet us for an exclusive interview and to our great surprise she agreed to speak with us. Our reporter, Richard Drake, met the Queen to talk about her life and her hard work.

*Story continued on the next page...*

1. Who owns the dog?
2. Which adjectives describe the dog?
3. What is happening on the 27<sup>th</sup> August?
4. How much does the paper cost?
5. What did the reporter talk to the Queen about?
6. Where should they return the dog to if they find it?

## SPANIEL STILL MISSING

Henry Bryan's pet spaniel Seymour has still not been found! Please keep an eye out for him. He has brown and white fur and looks a little like the dog in the sketch below.

Should you find him, please take him to the town hall.



## PANDOSTO

Come to the Rose Theatre on 27<sup>th</sup> August to see the first performance of Robert Greene's latest play "Pandosto". The lead role is believed to be played by the unknown actor William Shakespeare. Story has it that Shakespeare is interested in writing plays himself and hopes to be as famous as Greene one day.

*Story continued on page 12...*

Spellings:

knit knot gnat gnaw  
wrong write wrap  
dance (add -ing and -er)  
kind (add -ing and -er)  
happy (add -er and -est)  
nice (add -er and -est)  
judge fudge bridge gem giant  
charge dodge verge

Prickly spellings	Homophones
once two	knight/night
any many	one/won
<i>Review</i>	where/wear

Maths:

1. Circle the coins that total 7p.



Circle the coins that total 55p.



VF

4. Make 30p using three coins or less.








PS

2. What is the value of each set?



VF

5. Use the cards to complete the table.

Coin	Value	Colour
	50p	
	10p	silver
		silver
	20p	
		silver
	2p	

PS

2a. Circle the inequality symbol to make the statement true.



VF

2b. Circle the inequality symbol to make the statement true.



VF

3a. Write an inequality symbol in the box to compare the amounts.



VF

3b. Write an inequality symbol in the box to compare the amounts.



VF

# 2


# MONEY



1 Count the money.




p




p

2 Dexter has this coin.



Alex has these coins.



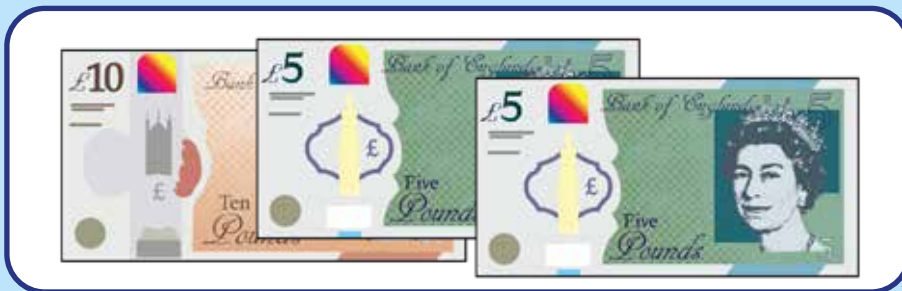
Who has the most money?

---

3 Match the money to the correct amount.



£20



£5



£10

4 Tick coins that make 72p.



5

A bag costs £47

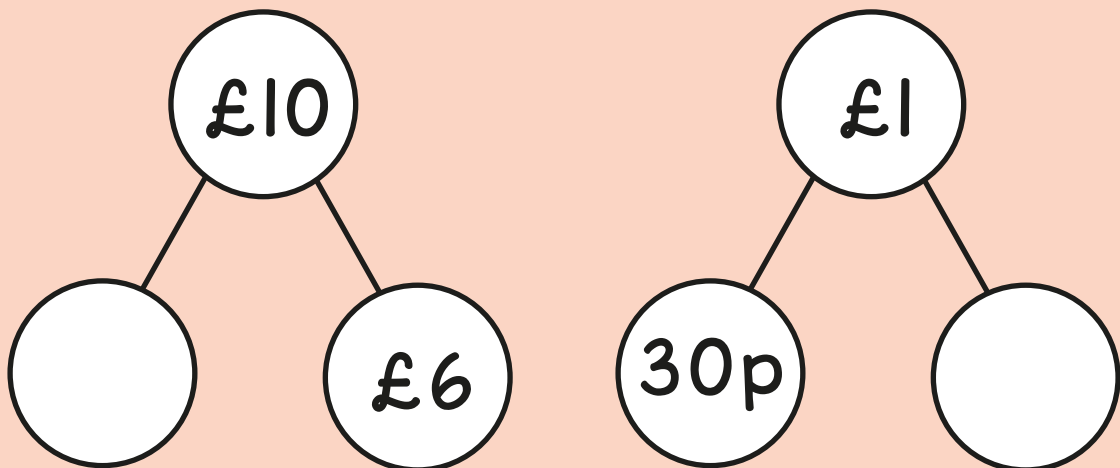
A coat costs £63

How much more does the coat cost?



6

Complete the part-whole models.






7

Eva has 80p.

Dora has 16p **more** than Eva.

Circle the coins that Dora has.




8


Ron has 40p in his money box.

He has exactly 6 coins.

Tick the coins in Ron's money box.



9 Here is a cafe price list for sandwiches.



Cheese	32p
Egg	29p
Chicken	35p
Jam	33p

Tommy buys two sandwiches.

The total cost is 68p.


Which two sandwiches does he buy?

\_\_\_\_\_ and \_\_\_\_\_

Rosie buys an egg sandwich.

She pays with a single coin.

Here is her change.



What coin did Rosie use to pay?

# Answers



1 60p  
32p

2 Dexter has the most money.

3

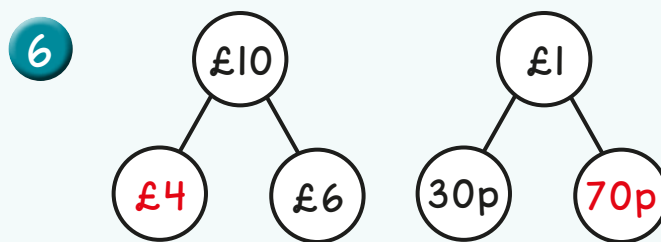
 A matching exercise with three boxes of money on the left and three labels on the right. Red arrows connect the boxes to the labels:
 

- The top box contains five 20p coins, with an arrow pointing to the £20 label.
- The middle box contains a 10p coin, a 5p coin, and a 5p note, with an arrow pointing to the £5 label.
- The bottom box contains three 10p coins, with an arrow pointing to the £10 label.

4

 Two rows of coins. The top row contains: a 1p coin (checked), a 2p coin, a 10p coin, a 10p coin, a 50p coin (checked), a 1p coin, and a 2p coin (checked). The bottom row contains: a 1p coin, a 2p coin, a 10p coin (checked), a 10p coin (checked), a 50p coin (checked), a 1p coin, and a 2p coin (checked).

5 £16



7

 A collection of coins: a 1p coin, a 2p coin, a 50p coin, a 2p coin, a 10p coin, a 1p coin, a 10p coin, and a 20p coin. The 1p, 50p, 10p, and 20p coins are circled in red.

8

 A collection of coins: a 50p coin, a 1p coin, a 10p coin (checked), a 10p coin (checked), a 10p coin, a 5p coin (checked), a 5p coin (checked), a 5p coin (checked), and a 5p coin (checked).

9 chicken and jam  
Rosie used a £1 coin.

